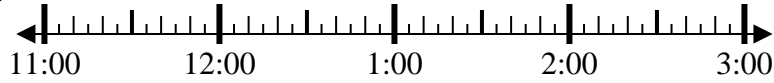


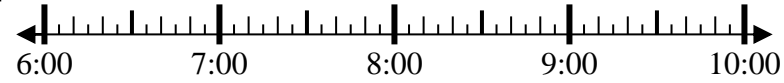


Solve each problem.

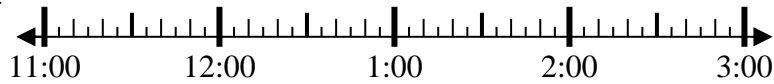
1) Start: _____
 Elapsed: 2 hrs & 35 mins
 End: 1:55



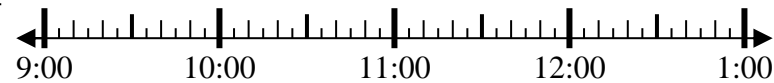
2) Start: _____
 Elapsed: 1 hr & 15 mins
 End: 7:30



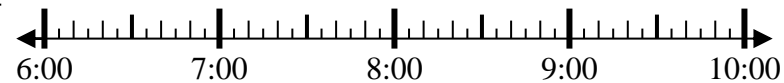
3) Start: _____
 Elapsed: 1 hr & 30 mins
 End: 12:35



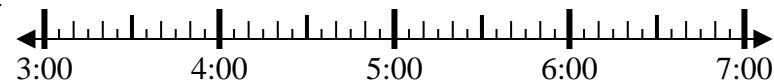
4) Start: _____
 Elapsed: 2 hrs & 30 mins
 End: 11:35



5) Start: _____
 Elapsed: 2 hrs & 35 mins
 End: 8:35



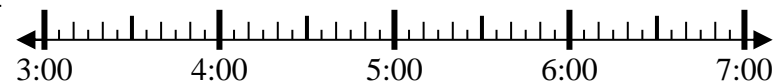
6) Start: _____
 Elapsed: 2 hrs & 10 mins
 End: 5:50



7) Start: _____
 Elapsed: 2 hrs & 25 mins
 End: 6:25



8) Start: _____
 Elapsed: 2 hrs & 30 mins
 End: 5:35



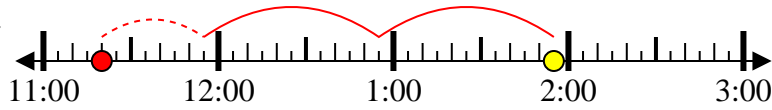
Answers

1. _____
2. _____
3. _____
4. _____
5. _____
6. _____
7. _____
8. _____



Solve each problem.

1) Start: 11:20
 Elapsed: 2 hrs & 35 mins
 End: 1:55



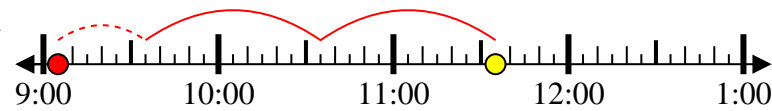
2) Start: 6:15
 Elapsed: 1 hr & 15 mins
 End: 7:30



3) Start: 11:05
 Elapsed: 1 hr & 30 mins
 End: 12:35



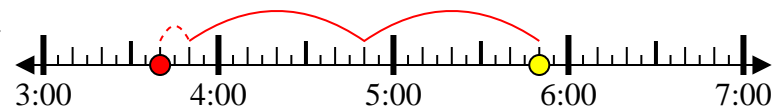
4) Start: 9:05
 Elapsed: 2 hrs & 30 mins
 End: 11:35



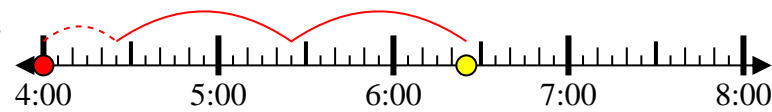
5) Start: 6:00
 Elapsed: 2 hrs & 35 mins
 End: 8:35



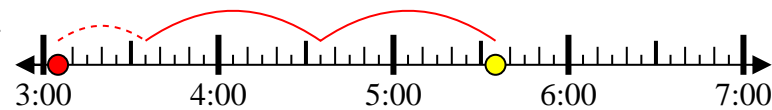
6) Start: 3:40
 Elapsed: 2 hrs & 10 mins
 End: 5:50



7) Start: 4:00
 Elapsed: 2 hrs & 25 mins
 End: 6:25



8) Start: 3:05
 Elapsed: 2 hrs & 30 mins
 End: 5:35



Answers

1. 11:20
2. 6:15
3. 11:05
4. 9:05
5. 6:00
6. 3:40
7. 4:00
8. 3:05